

Time allowed : 2 hours

Candidates should answer all questions. All answers must be written on this paper.

Candidate's name

Total Marks 100

1a Add the missing time signature to each of the following melodies. Describe each time signature as Duple, Triple or Quadruple.

Schumann

A single staff of music in treble clef. The melody consists of 12 notes: quarter, eighth, eighth, quarter, quarter, quarter, quarter, quarter, quarter, quarter, quarter, quarter. There is a blank line below the staff for the time signature.

Bach

A single staff of music in treble clef. The melody consists of 12 notes: quarter, quarter, quarter, quarter, quarter, quarter, quarter, quarter, quarter, quarter, quarter, quarter. There is a blank line below the staff for the time signature.

b Add the necessary rest or rests at \* to complete each bar.

Hummel

A single staff of music in treble clef with a 4/4 time signature. The melody consists of 12 notes: quarter, quarter, quarter, quarter, quarter, quarter, quarter, quarter, quarter, quarter, quarter, quarter. There are asterisks (\*) above the first, fourth, seventh, and tenth notes. There is a box with the number 10 below the staff.

2a Continue to group these notes into crotchet beats by drawing circles.

Rebikoff

A single staff of music in treble clef with a 2/4 time signature. The melody consists of 12 notes: quarter, quarter, quarter, quarter, quarter, quarter, quarter, quarter, quarter, quarter, quarter, quarter. The first two notes are circled. There is a box with the number 10 below the staff.

b Now rewrite the notes correctly grouped.

A single staff of music in treble clef with a 2/4 time signature. The staff is blank for the student to rewrite the notes from the previous part.

3 Rewrite the given melody at the same pitch using the bass clef.


Diabelli



10

4 Write the key signature and one octave of each of the named scales. Mark all semitones.


G major ascending




B flat major descending




D minor ascending



E minor ascending

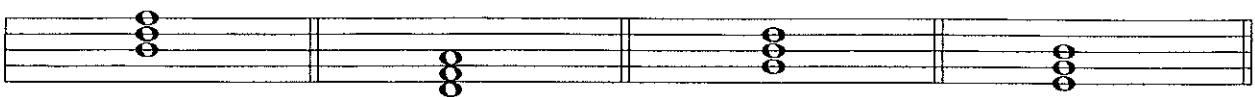


D major descending



10

5a Add the correct clef and any necessary accidentals to each of these tonic triads.



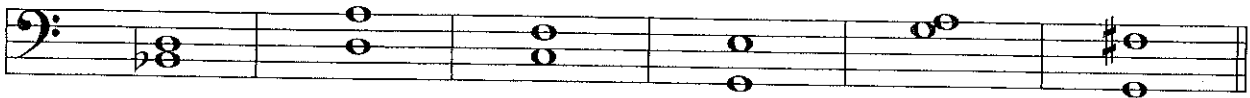
D minor

D major

B flat major

G major

b Name each of the following intervals.



10


6a Add accidentals to this melody so that it is in the key of B flat major.



b Name the key of the following melody. Key: \_\_\_\_\_



c Now rewrite the melody with key signature (also include the time signature).



10

7 Carefully think through the sound of these two bars and write another two bars to finish the tune. End on *d*.



10

Answer questions 8, 9 and 10 on the following tune called 'Norwegian Dance Melody' by Grieg.

**Presto marcato**

- 8 (i) Name the key: \_\_\_\_\_  
 (ii) Is the time signature duple, triple or quadruple? \_\_\_\_\_  
 (iii) What is the shortest note value that is used in this piece? \_\_\_\_\_  
 (iv) Describe the interval circled in bar 4: \_\_\_\_\_  
 (v) Are the notes in the box in bar 5 a tone or semitone apart? \_\_\_\_\_

10

- 9 (i) Draw one note to which a full bar is equal: \_\_\_\_\_  
 (ii) Name a bar that contains triplet quavers? \_\_\_\_\_  
 (iii) Explain a triplet: \_\_\_\_\_  
 (iv) Explain Presto: \_\_\_\_\_  
 (v) The start of this piece should be played: (loudly / softly) \_\_\_\_\_

10

- 10 (i) The rhythm of bar 1 is also heard in bars \_\_\_ and \_\_\_\_ .  
 (ii) Draw a circle around the interval of a perfect 4th.  
 (iii) Write the solfa names under the notes of bars 6 and 7.  
 (iv) Write bars 6 and 7 in notes and rests of double value. Include the new time signature.

10