

Local Centre Examination Paper

Theory Grade 1

May 2016

Time allowed : 1 hour 30 minutes

Candidates should answer all questions. All answers must be written on this paper.

Candidate's name

Total Marks 100

1 Draw the notes which match these words. The first one on each line is done for you.

B E D E D G E F A D E D

D E E D B A D G E G A G G E D

10

2 Below each note or rest write its time name and the number of beats it gets. The first one is done for you.

Time name: Minim


Beats: 2

Time name: _____


Beats: _____

10

6 a Write the scale of C major **going down** in the treble clef. Mark the semitones with slurs.

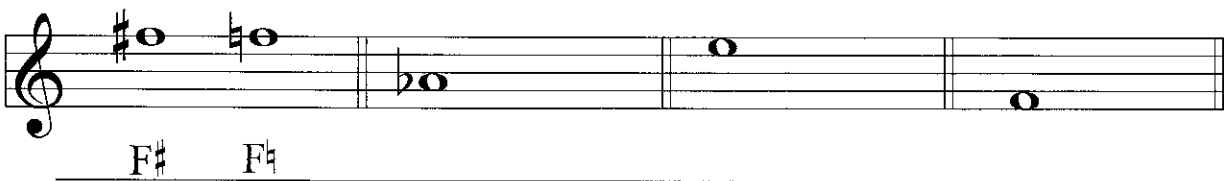


b Write the scale of G major **going up** in the bass clef. Use a key signature. Mark the semitones with slurs.




10

7 Beside each note draw another note which is a semitone lower. Write the letter names under both notes. The first one on each line is done for you.



F# F#



G F#

10

Answer questions 8, 9 and 10 about this piece.

Chambonnières

- 8 (i) Write a word over bar 1 to show that the music is to be played fairly quick and lively.
 (ii) Write a letter below bar 1 to show that the music is to be played softly.
 (iii) Draw a sign below bars 2 & 3 to show that the music gets gradually louder.
 (iv) Write a letter below bar 5 to show that the music is to be played loudly.
 (v) Write a word over bar 7 to show that the music gets gradually slower.

10

- 9 (i) Explain (bar 4): _____
 (ii) Fill in the missing time signature. _____
 (iii) Name one bar where the notes do **not** move by step: _____
 (iv) Draw a circle around two notes which are a tone apart. Write the letter T above the circle.
 (v) Draw a circle around two notes which are a semitone apart. Write the letter S above the circle.

10

- 10 (i) Draw an X above a natural sign.
 Name the note: _____
 (ii) What is the time name of the shortest note? _____
 What is its value? _____
 (iii) What is the time name of the longest note? _____
 What is its value? _____
 (iv) Copy out bars 5 - 8 on the staff below. Include the key signature.

10