

Local Centre Examination Paper

Theory Grade Preparatory

May 2017

Time allowed : 1 hour

Candidates should answer all questions. All answers must be written on this paper.

Candidate's name

Total Marks 100

- 1 In each of the bars below draw the named note or rest.
The first one is done for you.


Dotted half note Crotchet note Whole note rest Minim note Quarter note rest Semibreve note

10

- 2 Add the top number of the time signature to each tune.


10

3 Draw the barlines in these tunes.




10

4 Draw a treble (G) or bass (F) clef before each note to make its letter name correct. The first one is done for you.



10

5a Draw the missing note at each *.




b Draw the missing rest at each *.




10


6a Draw stems to make these notes minims.



b Draw a **note** that gets the following value.
The first one is done for you.




c Draw a **rest** that gets the following value.
The first one is done for you.



7 Write the letter name below each note.
The first one on each line is done for you.

10



10

Questions 8, 9 and 10 are on the next page.

Please turn over the page now.

Study this nursery melody. Then answer questions 8, 9 and 10.



8 Fill in the blanks.

The tune is written in the _____ clef. Its other name is the _____ clef. There are _____ beats in a bar. The letter name of the highest note is _____. The letter name of the lowest note is _____. It is in bar _____. The longest note is a _____. It gets _____ beat(s). The rest in bar 4 is called a _____ rest. It gets _____ beat(s).

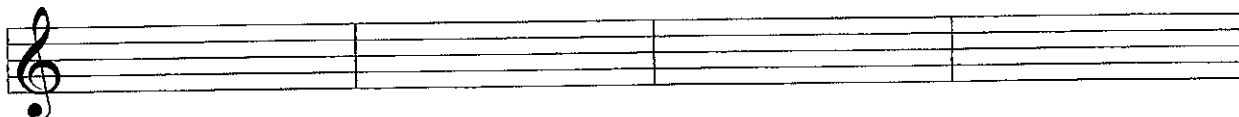
10

9 Read these questions then circle the correct answer.

- | | | | |
|--|---|---|---|
| Which bar has a whole note? | 4 | 6 | 8 |
| How many times is C played? | 7 | 8 | 9 |
| Which bar is the same as bar 1? | 2 | 4 | 5 |
| How many minims are in the tune? | 1 | 2 | 3 |
| Which bar has notes moving only by step? | 3 | 5 | 7 |

10

10 Copy the first line of the music (bars 1- 4) onto the staff below.



10