

**Local Centre Examination Paper**

**Theory Grade 2**

**May 2018**

Time allowed : 1 hour 30 minutes

Candidates should answer all questions. All answers must be written on this paper.

Candidate's name
------------------

Total Marks 100
-----------------

1 Name each of the notes below. The first one is done for you.

C      \_\_\_\_\_

\_\_\_\_\_

10
----

2 Rewrite these notes correctly grouped on the staff below.  
Change the direction of the stems within the group if necessary.

J.S. Bach adapted

10
----

3 a Add one note at \* in bars 1, 2 and 3. Add one rest at \* in bars 4 and 5, to complete each bar.



b The melody below has five pairs of tied notes. Under each pair write the number of beats for which the sound lasts.



\_\_\_\_\_

10


4 Name the key to which each key signature belongs. Then draw its tonic triad.



\_\_\_\_\_

10

5 a Describe the distance between these notes as tone or semitone.



\_\_\_\_\_


b Add accidentals to put the following melody into F major.



10



Answer questions 8, 9 and 10 on the following tune from Schubert's 'Das Wandern'.



- 8 Write these signs and letters on the music:
- (i) Write a letter at the beginning to show that it should be played very softly.
  - (ii) Draw a sign below bar 3 to show that the music is gradually getting louder.
  - (iii) Write a letter below bar 5 to show that the music is moderately loud.
  - (iv) Write a letter below bar 7 to show that the music should be played softly.
  - (v) Draw a repeat mark at the end of the piece.


9 10

Fill in the blanks in these sentences:

- (i) The key of this piece is \_\_\_\_ major.
- (ii) There are \_\_\_\_ beats in each bar.
- (iii) The letter name of the highest note is \_\_\_\_\_.
- (iv) The letter name of the lowest note is \_\_\_\_\_.
- (v) The lowest note is played \_\_\_\_ times.

10

- 10 Answer the following:
- (i) The shortest note value is a \_\_\_\_\_.
  - (ii) Name two bars that are the same: \_\_\_\_\_ and \_\_\_\_\_.
  - (iii) Name one bar that moves only by leap: \_\_\_\_\_.
  - (iv) Copy the last four bars onto the stave below.



10